

ORDERING SIMILAR FRACTIONS

FRACTIONS

(4-given fractions) (with illustration)

EASY - A1010

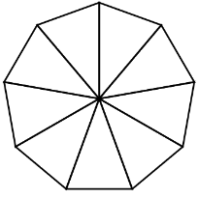
TS: _____

TF: _____

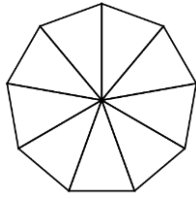
Name: _____ Date: _____

**Directions: Shade the fractions and arrange them from least to greatest.
(1 - 4)**

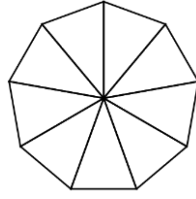
1)



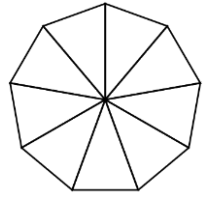
$$\frac{5}{9}$$



$$\frac{9}{9}$$

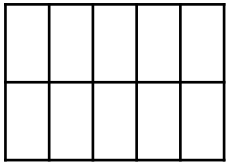


$$\frac{7}{9}$$

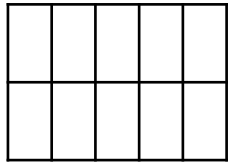


$$\frac{6}{9}$$

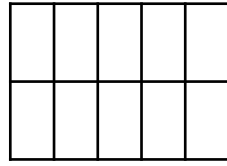
2)



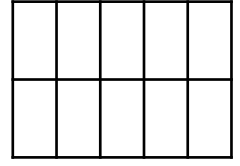
$$\frac{2}{10}$$



$$\frac{6}{10}$$

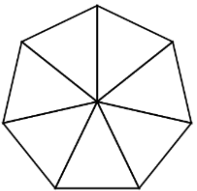


$$\frac{5}{10}$$

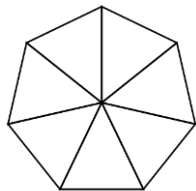


$$\frac{8}{10}$$

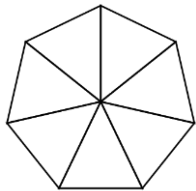
3)



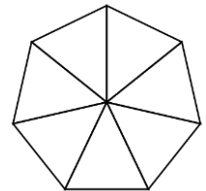
$$\frac{6}{7}$$



$$\frac{4}{7}$$



$$\frac{3}{7}$$



$$\frac{5}{7}$$