

# ORDERING SIMILAR FRACTIONS

FRACTIONS

(4-given fractions) (with illustration)

**EASY - A1006**

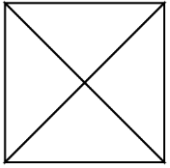
TS: \_\_\_\_\_

TF: \_\_\_\_\_

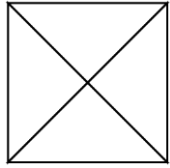
Name: \_\_\_\_\_ Date: \_\_\_\_\_

**Directions: Shade the fractions and arrange them from least to greatest.  
(1 - 4)**

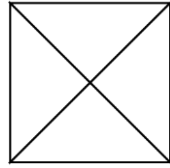
1)



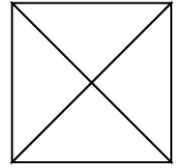
$$\frac{4}{8}$$



$$\frac{7}{8}$$

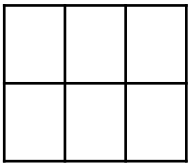


$$\frac{5}{8}$$

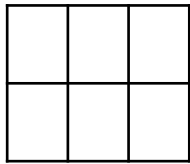


$$\frac{8}{8}$$

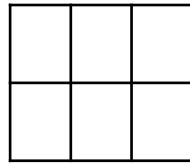
2)



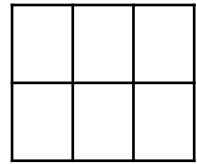
$$\frac{3}{6}$$



$$\frac{5}{6}$$

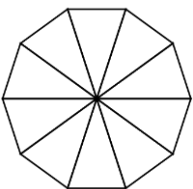


$$\frac{1}{6}$$

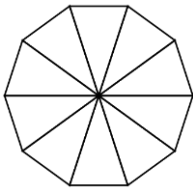


$$\frac{4}{6}$$

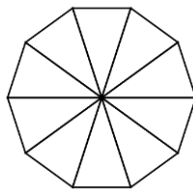
3)



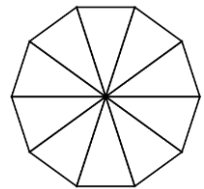
$$\frac{7}{10}$$



$$\frac{8}{10}$$



$$\frac{6}{10}$$



$$\frac{9}{10}$$