

ORDERING SIMILAR FRACTIONS

FRACTIONS

(4-given fractions) (with illustration)

EASY - A1002

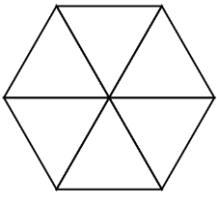
TS: _____

TF: _____

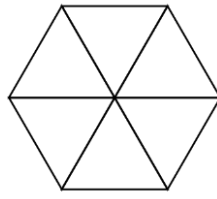
Name: _____ Date: _____

**Directions: Shade the fractions and arrange them from least to greatest.
(1 - 4)**

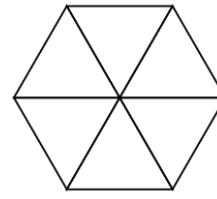
1)



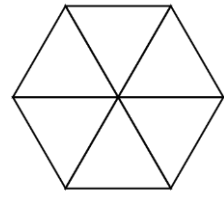
$$\frac{3}{6}$$



$$\frac{2}{6}$$

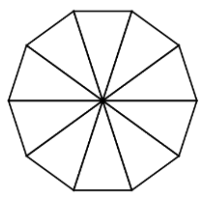


$$\frac{4}{6}$$

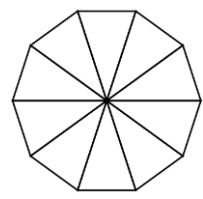


$$\frac{1}{6}$$

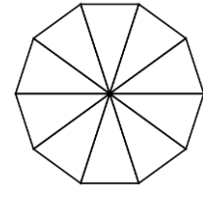
2)



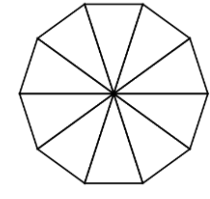
$$\frac{2}{10}$$



$$\frac{1}{10}$$

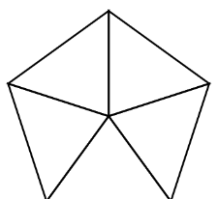


$$\frac{4}{10}$$

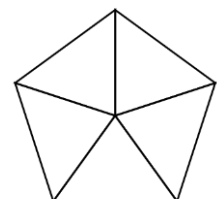


$$\frac{3}{10}$$

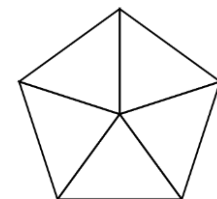
3)



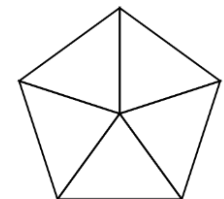
$$\frac{1}{5}$$



$$\frac{3}{5}$$



$$\frac{2}{5}$$



$$\frac{4}{5}$$